



Fichas Atenção

Encontra e escreve o
número mais pequeno da
tabela

www.edukinclusiva.pt

42	16	31	31
20	28	26	34
40	17	34	28




20	33	38	38
43	54	30	46
48	53	45	52





Encontra e escreve no retângulo o número mais pequeno da tabela


42	16	31	31
20	28	26	34
40	17	34	28



20	33	38	38
43	54	30	46
48	53	45	52




56	66	35	48
50	59	37	66
57	36	42	41



41	26	29	50
40	12	12	16
18	42	27	31



43	35	13	30
15	32	38	13
46	38	13	30



28	22	25	56
28	26	57	28
26	59	45	47



39	62	33	54
70	45	60	53
52	45	62	32



43	28	23	47
48	16	13	33
10	13	21	28




21	39	34	32
14	20	17	49
34	35	47	17



31	49	60	31
29	35	38	37
21	54	31	41



65	55	42	61
57	43	40	62
56	50	56	61




17	17	37	36
34	25	36	48
33	24	22	22





Encontra e escreve no retângulo o número mais pequeno da tabela


40	47	41	31
20	15	39	46
28	50	26	50



53	24	26	51
36	38	27	40
52	23	56	41




63	46	65	46
55	45	62	57
46	50	48	68



21	17	28	43
43	15	25	18
37	38	16	37



34	30	13	46
47	28	18	36
36	39	30	35



36	43	44	28
54	33	45	34
47	46	58	28




52	42	69	70
48	52	38	55
39	45	30	37



28	48	21	47
38	26	25	13
45	41	19	30




32	35	29	35
25	21	14	16
10	16	30	35



39	32	58	56
20	48	58	53
31	36	21	52



35	51	46	55
40	42	39	50
57	56	64	46




37	18	30	10
31	31	33	32
35	15	32	13





Encontra e escreve no retângulo o número mais pequeno da tabela


35	23	47	15
35	34	32	11
23	49	20	44



29	30	59	47
54	21	39	45
39	58	41	38




35	67	64	47
57	63	60	68
35	47	70	34



12	34	14	26
24	35	50	14
32	14	43	18



50	43	18	25
31	50	32	44
50	10	25	31



41	23	55	48
58	56	34	45
34	22	50	29




66	65	58	42
51	42	67	30
50	52	46	41



15	43	30	11
50	32	40	48
21	50	17	45




21	46	50	23
19	17	13	22
16	10	34	34



60	32	36	28
48	47	40	52
48	24	56	23



39	42	70	48
58	62	50	66
62	39	59	69




46	47	29	29
38	23	46	40
38	23	49	15





Encontra e escreve no retângulo o número mais pequeno da tabela


37	20	21	19
37	50	15	40
12	39	17	19



42	39	35	35
55	23	26	26
21	31	29	37




66	37	44	36
36	59	45	44
39	41	45	40



38	34	12	13
18	43	27	46
48	28	37	35



46	50	21	41
32	50	35	48
45	27	40	48



45	22	41	54
40	51	32	35
58	57	57	22



47	55	47	38
52	51	39	53
69	30	40	33



36	50	21	14
42	43	48	48
32	11	44	33




20	31	25	45
19	50	25	47
33	16	46	50



58	33	27	60
26	28	30	30
40	40	24	39



68	32	51	67
45	56	45	50
39	35	64	57




26	39	18	37
42	25	23	17
40	31	17	33





Encontra e escreve no retângulo o número mais pequeno da tabela


20	36	10	41
18	31	33	38
41	14	14	39



39	31	46	30
33	60	35	20
55	31	53	27




39	33	66	51
62	32	60	60
41	51	69	65



43	14	27	27
28	34	26	31
45	32	29	21



35	27	14	32
26	49	20	13
42	16	14	36



44	25	35	51
21	46	22	37
40	34	44	36



47	49	43	37
66	38	48	58
39	67	31	55



39	48	30	13
21	37	47	21
45	46	16	47




22	43	47	12
40	21	12	49
24	13	18	37



27	24	60	23
24	28	56	55
59	46	60	37



63	69	60	35
44	39	31	59
39	40	42	37



37	42	13	27
15	38	34	41
43	21	13	26

